









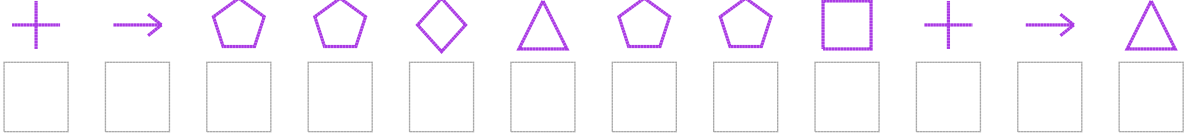


Şekil Sayı Eşleştirme

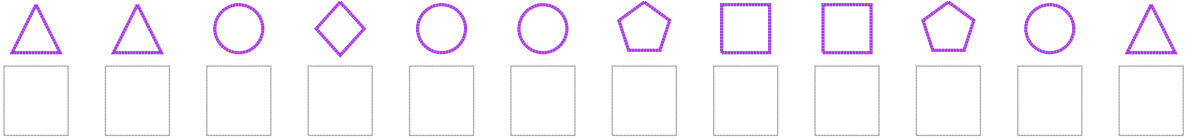
 = 8	 = 7	 = 0	 = 1	 = 2	 = 3	 = 4	 = 6	 = 5	 = 9
--	--	--	--	--	--	---	--	--	--

Aşağıdaki uzun şifreleri hatasız çözerek altlarına yazın:

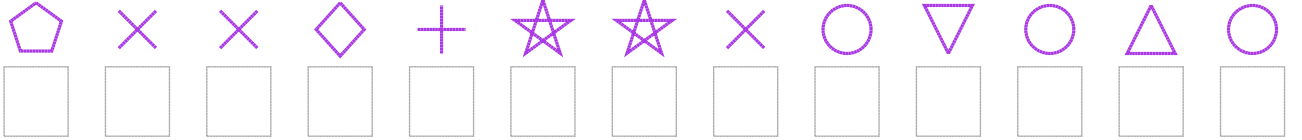
1. Şifre



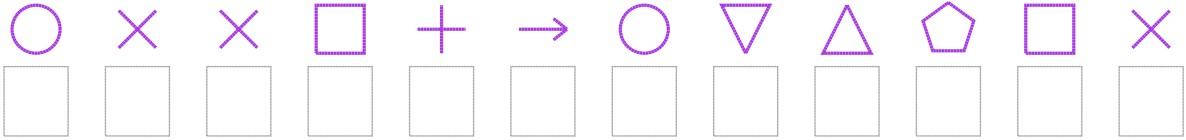
2. Şifre



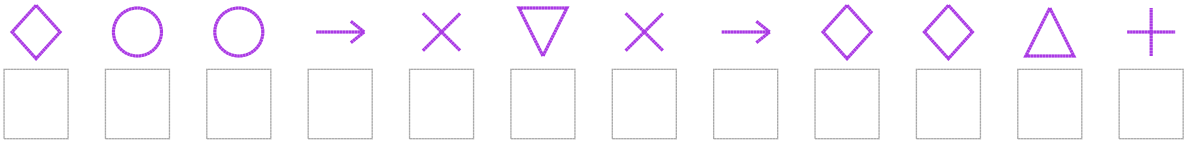
3. Şifre



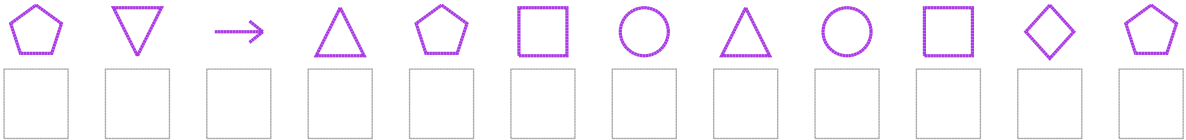
4. Şifre



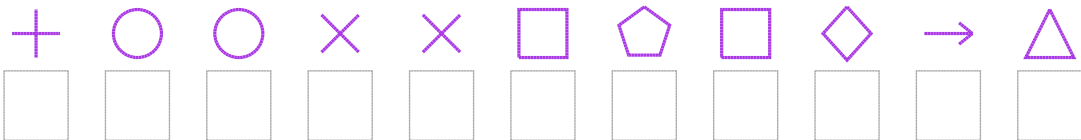
5. Şifre



6. Şifre



7. Şifre



□ BONUS: 6. ve 5. şifrenin üçüncü rakamının toplamı kaçtır?

Cevap Anahtarı

1. Şifre: 507769771509

2. Şifre: 992622711729

3. Şifre: 7336588324292

4. Şifre: 233150249713

5. Şifre: 622034306695

6. Şifre: 740971292167

7. Şifre: 52233171609

□ Bonus Soru Cevabı: 2